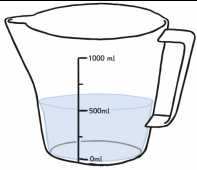

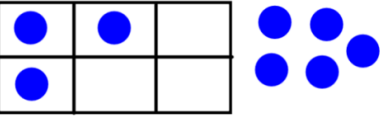
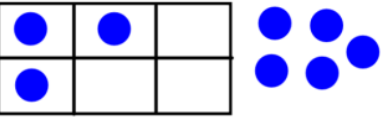
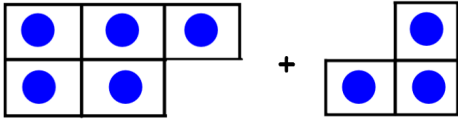
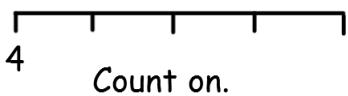

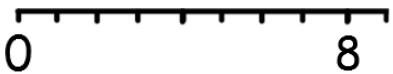


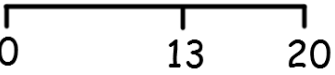

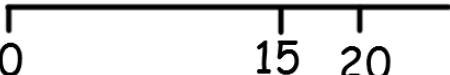


Name: _____

Class: _____

Date: _____

<p>Step 1 I know when to add some more</p>		<p>Ⓣ Can we add any more to this jug?</p>
<p>Step 2 I know how to find the total</p>		<p>Ⓣ Count how many.</p>
<p>Step 3 I can add the right amount</p>		<p>Ⓣ Can you add 3 more counters?</p>
<p>Step 4 I can add the right amount and can count how many altogether</p>		<p>Ⓣ Can you add 3 more and count how many altogether?</p>
<p>Step 5 I can add numbers of objects to 10</p>		<p>Ⓣ How many in the first group and count on to see how many altogether?</p>
<p>Step 6 I can read a number sentence</p>	<p>$4 + 2 =$</p>	<p>Ⓣ Say this number sentence.</p>
<p>Step 7 I can arrange a number sentence</p>	<p>$6 + 4 =$</p>	<p>Ⓣ Use block or objects to show this number sentence.</p>
<p>Step 8 I can solve a number sentence</p>	<p>$5 + 6 =$</p>	<p>Ⓣ Use blocks to show and solve.</p>
<p>Step 9 I can solve addition on a number line</p>	<p>Ⓣ $4 + 4 =$  Count on.</p>	<p>$6 + 3 =$  Count on.</p>
<p>Step 10 I can add 1 to a number up to 20</p>	<p>$8 + 1 =$ </p>	<p>$14 + 1 =$ </p>
<p>Step 11 I can add 2 or 3 to a number up to 20</p>	<p>$6 + 2 =$ </p>	<p>$13 + 3 =$ </p>
<p>Step 12 I can add a 1d number to a number to 20</p>	<p>$6 + 8 =$ </p>	<p>$15 + 8 =$ </p>

Step 13 I can add 1 to a 2d number	$26 + 1 =$ $24, 25, 26, \underline{\quad}$	$32 + 1 =$ $30, 31, 32, \underline{\quad}$
Step 14 I can add 10 to a 2d tens number	$30 + 10 =$ $10, 20, 30, \underline{\quad}$	$50 + 10 =$ $5 \text{ tens} + 1 \text{ ten} =$
Step 15 I can add 10 to any 2d number	$38 + 10 =$	$56 + 10 =$
Step 16 I can add a 1d number to a 2d tens number	$20 + 6 =$	$30 + 4 =$
Step 17 I can solve 2d + 1d	$67 + 2 =$	$58 + 7 =$
Step 18 I can add a 2d tens number to another one	$20 + 10 =$	$30 + 20 =$
Step 19 I can solve any 1d + 1d in my head	Mentally solve $6 + 7 =$ Put 6 in your head and count 7 on using your fingers.	Mentally solve $8 + 9 =$ Put 8 in your head and count 9 on using your fingers.
Step 20 I can solve any 2d + 1d	Partition and solve $25 + 6 =$ $20 + 5 + 6$	Partition and solve $54 + 7 =$ $50 + 4 + 7$
Step 21 I can add any 2d tens number to another one	$50 + 30 =$	$70 + 40 =$
Step 22 I can add a 2d tens number to a 2d number	$20 + 12 =$	$30 + 23 =$
Step 23 I can add any 2d tens number to a 2d number	$12 + 20 =$	$23 + 30 =$
Step 24 I can add a 2d number to a 2d number	Partition and solve $24 + 18 =$	Partition and solve $32 + 46 =$
Step 25 I can solve any 2d + 2d	$28 + 46 =$	$21 + 92 =$
Step 26 I can solve 3d + 2d	$128 + 10 =$	$242 + 15 =$

Step 27 I can solve any 3d + 2d	$113 + 32 =$	$511 + 24 =$
Step 28 I can solve 3d + 3d	Add the Hundreds then Tens then Ones. $121 + 342 =$	Add the Hundreds then Tens then Ones. $614 + 273 =$
Step 29 I can solve any 3d + 3d	Add the Hundreds then Tens then Ones. $385 + 436 =$	Add the Hundreds then Tens then Ones. $590 + 806 =$
Step 30 I can solve 3d + 3d as money	$£4.75 + £1.00 =$	$£3.20 + £2.05 =$
Step 31 I can solve any 3d + 3d as money	$£3.13 + £5.36 =$	$£1.12 + £2.90 =$
Step 32 I can solve 1dp + 1dp	$0.6 + 0.2 =$	$0.4 + 0.5 =$
Step 33 I can solve any 1dp + 1dp	$0.5 + 0.8 =$	$0.9 + 0.6 =$
Step 34 I can solve 1d.1dp + 1d.1dp	$2.6 + 3.2 =$	$5.1 + 1.8 =$
Step 35 I can solve any 1d.1dp + 1d.1dp	$3.5 + 5.9 =$	$8.3 + 6.9 =$
Step 36 I can solve additions with 2dp	$1.72 + 3.06 =$	$4.51 + 2.41 =$
Step 37 I can solve any additions with 2dp	$2.60 + 7.51 =$	$6.50 + 6.59 =$
Step 38 I can solve additions with larger numbers	$663 + 1259 =$	$5471 + 348 =$
Step 39 I can solve additions with several numbers	$154 + 4 + 53 =$	$530 + 72 + 9 =$
Step 40 I can solve 2dp + 1dp	$7.12 + 1.1 =$	$4.45 + 4.3 =$
Step 41 I can solve any 2dp + 1dp	$3.64 + 6.4 =$	$5.99 + 9.4 =$